

# Characteristic curve and efficiency of a PEM fuel cell and a PEM electrolyser



Physics

Electricity & Magnetism

Electric current & its effects

Applied Science

Engineering

Renewable Energy

Hydrogen technology & fuel cells



Difficulty level

hard



Group size

-



Preparation time

-



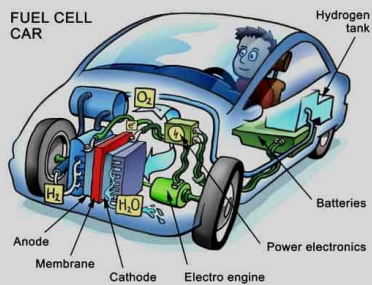
Execution time

-



# General information

## Application



Fuel Cell Vehicle

The hydrogen produced from Polymer electrolyte membrane (PEM) electrolysis can be used for many applications, such as:

- Vehicle fueling
- Cooling alternators in power plants
- Power generation

## Other information (1/2)

**PHYWE**  
excellence in science

### Prior knowledge



In principal, an electrolysis process consists of an electrolyte, electrodes, and an external power source. Electrolysis is the passing of a direct electric current through an electrolyte producing chemical reactions at the electrodes and decomposition of the materials.

### Scientific principle



In a PEM electrolyser, the electrolyte consists of a protonconducting membrane and water (PEM = Proton-Exchange-Membrane). When an electric voltage is applied, hydrogen and oxygen are formed. The PEM fuel cell generates electrical energy from hydrogen and oxygen. The electrical properties of the electrolyser and the fuel cell are investigated recording a current-voltage characteristic line. The efficiency is determined measuring the quantities of the gases generated or consumed.

## Other information (2/2)

**PHYWE**  
excellence in science

### Learning objective



Understanding the characteristics and efficiency of the PEM - electrolysis.

### Tasks



1. Record the characteristic line of the PEM electrolyser.
2. Record the characteristic line of the PEM fuel cell.
3. Determine the efficiency of the PEM electrolysis unit.
4. Determine the efficiency of the PEM fuel cell.

## Safety instructions

**PHYWE**  
excellence in science

For this experiment the general instructions for safe experimentation in science lessons apply.

For H- and P-phrases please consult the safety data sheet of the respective chemical.

Prevent hydrogen from escaping. Completely use up all hydrogen at the end of experiments and before dismantling.

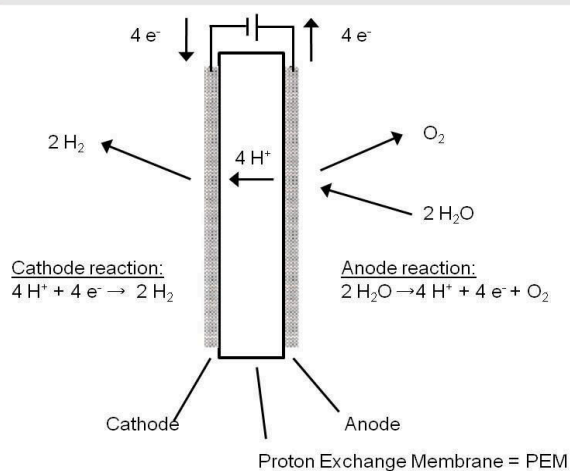
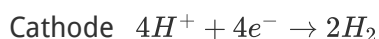
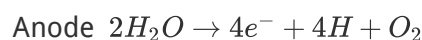
Check tubes and connections for damage before each setup.

## Theory (1/11)

**PHYWE**  
excellence in science

The principal part of the PEM electrolysis unit and the PEM fuel cell is a membraneelectrode unit. A layer of catalyst material has been applied to both sides of the thin protonconducting membrane (PEM = proton exchange membrane). These two layers form the anode and cathode of the electrochemical cell.

In the electrolyser the following reaction occurs:



Functional principle of a PEM electrolyser.

## Theory (2/11)

**PHYWE**  
excellence in science

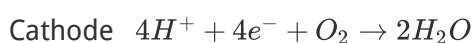
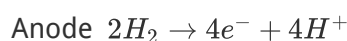
On the anode side gaseous oxygen, electrons and  $H^+$  ions are formed when an external voltage is applied. The  $H^+$  ions pass through the proton-conduction membrane to the cathode and form gaseous hydrogen there with the electrons flowing through the external conducting circuit. The fuel cell functions by the inverse principle.

In electrolysis electrical energy is transformed into chemical energy and stored in the form of hydrogen and oxygen; in the fuel cell chemical energy in the form of hydrogen and oxygen is directly converted, i.e. without a combustion process, into electrical energy. Hydrogen and oxygen react to form water, giving up electricity and heat.

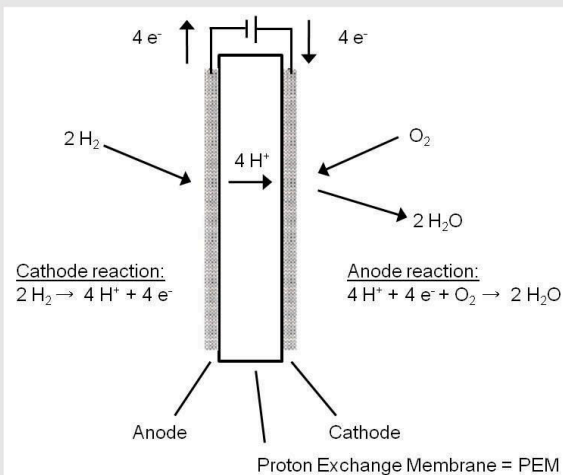
## Theory (3/11)

**PHYWE**  
excellence in science

In the fuel cell the following reaction occurs:



Since the gaseous hydrogen which is supplied to the anode is oxidised, it decomposes due to the catalytic action of the electrode (e.g. platinum) into protons and electrons.



Functional principle of a PEM fuel cell

## Theory (4/11)

The  $H^+$  ions pass through the proton-conducting membrane to the cathode side. The electrons pass through the closed outer electrical circuit to the cathode and do electrical work in this manner. The gaseous oxygen which is supplied to the cathode is reduced. In the process, water is formed in addition to the protons and electrons.

If a hydrogen and an oxygen electrode are located in an electrolyser or a fuel cell, there is a potential difference  $\Delta D$  between the two electrodes. It is temperature dependent; its theoretical value can be calculated from the free enthalpy of reaction  $\Delta G$  and is equal to

$$\Delta E = 1.23V \text{ at } 25^\circ\text{C}.$$

In electrolysis, the applied voltage must be at least as large as this theoretical cell voltage in order for a current to be able to flow. In the fuel cell the maximum terminal voltage can be as large as this theoretical value. In both the electrolyser and the fuel cell, additional potentials occur at the electrodes.

## Theory (5/11)

In the electrochemical equilibrium, phase boundary potentials between the electrode and the membrane also occur at the electrodes. In the process, there is a continuous exchange of charges between the two, but the gross reaction is equal to zero.

If, in addition, a current flows through the electrolyser or the fuel cell, the electrochemical equilibrium at the electrodes is disturbed. The electrode potential takes on another value, which is dependent on the current density, due to various reactions at the electrode. This deviation from the equilibrium value is termed "electric polarization", i.e. the electrode becomes polarised.

The characteristic lines of the electrolyser and the fuel cell thus exhibit a nearly linear course only at larger values of current; in this region the movement of the ions through the membrane is decisive. The quantity of substance  $n$  liberated at an electrode can be calculated using Faraday's law.

## Theory (6/11)

$$n = \frac{I \cdot t}{zF} \quad (1)$$

where  $I$  = current,  $t$  = time,  $z$  = number of electrons required to liberate a molecule,  $F$  = Faraday's constant,  $F = 96\,485 \text{ As/mol}$ .

In this experiment gases are evolved. The volume of a substance quantity  $n$  can be determined using the general gas equation.

$$V = \frac{nRT}{p} \quad (2)$$

where  $T$  = absolute temperature,  $p$  = pressure,  $R$  = general gas constant  $R = 8.31 \text{ J/(mol K)}$

## Theory (7/11)

If a current  $I$  flows in an electrolyser, the following gas volume per unit time is generated according to Equations (1) and (2):

$$\frac{V}{t} = \frac{IRT}{zFp} \quad (3)$$

In the fuel cell, this gas volume per unit time is required in order that the current  $I$  can flow. To determine the efficiency of the electrolyser and the fuel cell, the electrical  $W_{el}$  and the chemical  $W_{H_2}$  energies of the generated or required hydrogen are calculated.

$$W_{el} = U \cdot I \cdot t \quad (4)$$

$$W_{H_2} = n \cdot H \quad (5)$$

where  $U$  = voltage,  $I$  = current,  $t$  = time,  $n$  = quantity of hydrogen,  $H$  = molar caloric content (molar reaction enthalpy) of hydrogen.

## Theory (8/11)

One differentiates between the lower caloric content  $H_{low}$  and the upper caloric content  $H_{up}$ . Molar caloric content of hydrogen:

$$H_{low} = 242.0 \text{ kJ/mol}$$

$$H_{up} = 266.1 \text{ kJ/mol}$$

The difference between the two is the molar enthalpy of vaporization (condensation enthalpy)  $q$  of water.

$$H_{up} = H_{low} + q \quad (6)$$

The efficiency of the electrolyser is greatly dependent on the respective operating condition. If it has not been used for a long time, the current intensity at 2 V can be smaller than shown in the table; after a long period of operation, sometimes much larger (e. g. greater than 4 A).

## Theory (9/11)

### Efficiency of the PEM electrolyser

The missing gas is due to diffusion losses within the cell. The efficiency of the electrolyser can be calculated using equations (4) and (5)

$$\eta = \frac{W_{H_2}}{W_{el}} = \frac{H_0 n}{UIt} \quad (7)$$

Using the general gas equation (2), the measured volumes  $V$  of hydrogen are converted to substance quantities  $n$ . Thus, one obtains the following for the efficiency:

$$\eta = \frac{H_0 pV}{RTUIt} \quad (8)$$



## Theory (10/11)

**PHYWE**  
excellence in science

In addition, a correction factor should be taken into consideration at this time, if the volume marks on the gasometer funnels have been checked with a volume measuring device. In our case one measurement showed the following: 250 ml in gasometer = 255 ml in volume measuring device

$$V_{corr} = 1.02 \cdot V_{H_2}$$

## Theory (11/11)

**PHYWE**  
excellence in science

### Efficiency of the PEM fuel cell

The missing gas is due to diffusion losses within the cell. The efficiency of the fuel cell can be calculated using equations (4) and (5)

$$\eta = \frac{W_{el}}{W_{H_2}} = \frac{UIt}{Hn} \quad (9)$$

Due to the reaction occurring in the fuel cell, the upper caloric content  $H_{up}$  must be used to calculate the efficiency. In industry, it is however normal to calculate with the lower caloric content  $H_{low}$  because the heat of condensation only generates heat and no electrical energy. Using the general gas equation (2), the measured volumes  $V$  of hydrogen are converted to substance quantities  $n$ . Thus, one obtains the following for the efficiency:

$$\eta = \frac{RTUIt}{H_{up}pV} \quad (10)$$

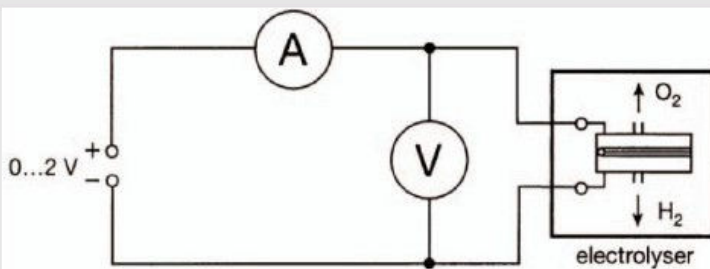
## Equipment

Position	Material	Item No.	Quantity
1	PHYWE Power supply, universal, analog display DC: 18 V, 5 A / AC: 15 V, 5 A	13503-93	1
2	PEM fuel cell kit, dismantable	06746-01	1
3	PEM electrolyser H <sub>2</sub> /O <sub>2</sub> 65	06730-00	1
4	Banana Plug Adapter 4mm to 2mm	06712-02	1
5	PHYWE Digital multimeter, 600V AC/DC, 10A AC/DC, 20 MΩ, 200 μF, 20 kHz, -20°C...760°C	07122-00	2
6	Connection box	06000-00	1
7	Resistor 10 Ohm 2%, 2W, G1	06056-10	2
8	Resistor 5 Ohm 5%, 2W, G1	06055-50	1
9	Resistor 2 Ohm 5%, 2W, G1	06055-20	1
10	Resistor 1 Ohm 2%, 2W, G1	06055-10	2
11	bridge plug	06027-07	2
12	Gas bar	40466-00	1
13	Graduated cylinder 100 ml, PP transparent	36629-01	1
14	Rubber tubing, i.d. 4 mm	39280-00	1
15	Rubber tubing, i.d. 6 mm	39282-00	1
16	Pinchcock, width 10 mm	43631-10	4
17	Tubing adaptor, ID 3-5/6-10 mm	47517-01	2
18	Wash bottle, plastic, 500 ml	33931-00	1
19	Beaker, 250 ml, plastic (PP)	36013-01	1
20	Digital stopwatch, 24 h, 1/100 s and 1 s	24025-00	1
21	Connecting cord, 32 A, 500 mm, red	07361-01	3
22	Connecting cord, 32 A, 500 mm, blue	07361-04	2
23	Connecting cord, 32 A, 250 mm, blue	07360-04	2
24	Water, distilled 5 l	31246-81	1
25	Weather monitor, 6 lines LCD	87997-10	1
26	Screw caps for PEM electrolyzer H <sub>2</sub> /O <sub>2</sub> 65	06730-01	0



## Setup and procedure

### Setup (1/9)



Circuit diagram: Characteristic and efficiency of the electrolyser.

#### 1. Characteristic line of the PEM electrolyser

- Insert the overflow tanks on top of the water reservoirs
- Fill both water reservoirs with water up to the -A- mark.

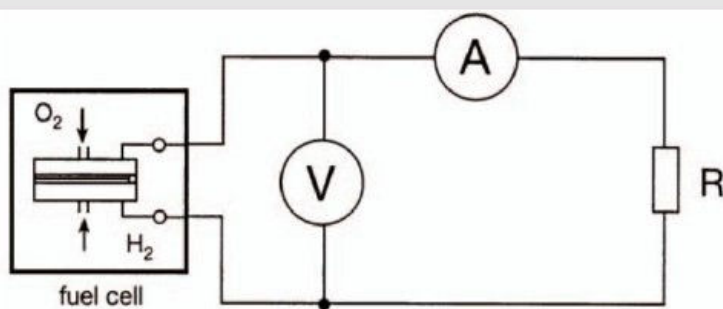
## Setup (2/9)

PHYWE  
excellence in science

Experimental setup

- Connect the electrolyser to the direct current (DC) port of the power supply in accordance with the experimental setup and the circuit diagram.

## Setup (3/9)

PHYWE  
excellence in science


Circuit diagram

**2. Characteristic line of the PEM fuel cell**

To record the characteristic line, the most simple method of providing the fuel cell with gas is to connect it directly with the electrolyser. However, it is also possible to take the gas from the gas bar, as described in the measurement of efficiency section.

Preparation of the electrolyser: Connect pieces of thin rubber tubing, which are approximately 40 cm long ( $d_i = 4 \text{ mm}$ ) to the upper outlet connections of the storage container on the electrolyser.

## Setup (4/9)

**PHYWE**  
excellence in science

Experimental setup

Fill both water reservoirs up the -A- line with distilled water. While doing so, hold up the tubing so that it also fills with water.

Use the overflow tanks on top of the storage tanks. Hold the water-filled pieces of rubber tubing into a beaker filled with distilled water. Connect the electrolyser to the power supply and set a current of max. 4.4 A or an operating voltage of max 4 V.

## Setup (5/9)

**PHYWE**  
excellence in science

When hydrogen and oxygen escape from the pieces of rubber tubing into the beaker, press the ends of the tubing briefly together; remove them from the water, and connect them to the upper inlet connections of the fuel cell.

Drops of water which could perhaps still be present in the tubes can interrupt the gas supply to the fuel cell. If this happens, the output voltage will drop. Lift the pieces of tubing briefly to allow the water to run out.

The electrical data of the fuel cell are dependent on the gas throughput and the moistness of the membrane. To create a stable condition in the fuel cell, it should be allowed to run for approximately 5 min under no-load conditions and then operated for approximately 5 min with a fixed load resistor of, e.g., 2  $\Omega$ .

## Setup (6/9)

**PHYWE**  
excellence in science



Experimental setup

### 3. Efficiency of the PEM electrolyser

Preparation of the gas bar with 2 gasometers: A gasometer consists of an Erlenmeyer flask with a cylindrical funnel and a bent glass tube mounted on it.

Connect the reducing adapters with a short piece of rubber tubing ( $d_i = 6$  mm) to each of the glass tubes on the gasometer.

## Setup (7/9)

**PHYWE**  
excellence in science

Fill each of the gasometers via its cylindrical funnel with distilled water until the Erlenmeyer flask and the right-angled glass tube are filled and contain nearly no bubbles. Excess water then flows out via the glass tube and is collected in a beaker. The filling heights of the cylindrical funnels are calibrated. It is advisable to check the exactness of these markings by filling the entire funnel with distilled water and then allowing it to flow into a volumetric measuring device.

Connect an approximately 40-cm-long piece of thin rubber tubing ( $d_i = 4$  mm) to the upper outlet connection of the storage container of the electrolyser.

Fill both water reservoirs up the -A- line with distilled water. While doing so hold up the tubing so that it also fills with water.

Seal the water-filled pieces of rubber tubing with a hose clamp approximately 2 cm from their ends and attach them to the gasometers.

## Setup (8/9)

**PHYWE**  
excellence in science

Put the provided screw caps onto the storage containers so that no gas can escape.

Open the hose clamps.

Connect the electrolyser to the power supply according to 1. and set a current of approximately 1 A with the current adjustment knob.

## Setup (9/9)

**PHYWE**  
excellence in science



Experimental setup

### 4. Efficiency of the PEM fuel cell

To determine the efficiency of the fuel cell, both gasometers of the gas bar should be as full as possible. To achieve this connect the two gasometers with the electrolyser (hose clamps open).

Operate the electrolyser with a voltage of about 3 V.

## Procedure (1/5)

**PHYWE**  
excellence in science

### 1. Characteristic line of the PEM electrolyser

Start the measurement with a voltage of  $U = 2 \text{ V}$ . In the process, the current may exceed the value of the maximum continuous current of  $I = 4.4 \text{ A}$  for a short time. After approximately 1 min, the values for voltage and current become stable.

Progressively increase the applied voltage from the power supply using the voltage adjustment knob. In the process, the power supply adjusts the current electronically so that the current has the value set.

Before recording a measured value, wait approximately 1 min until the current and voltage values have again become stable.

## Procedure (2/5)

**PHYWE**  
excellence in science

### 2. Characteristic line of the PEM fuel cell

Connect load resistors of different sizes to the fuel cell according to the circuit diagram. In each case measure the voltage  $U$  and the current  $I$ . First, measure the no-load voltage and then begin the measuring series with the largest resistance values.

Since the internal resistance of the ammeter can not be neglected with respect to the load resistor, always use the 10 A measuring range. For resistance values smaller than  $1 \Omega$  the values for current and voltage may not always be stable when an insufficient quantity of gas is supplied.

Before making a measurement, the electric circuit should be opened for approximately 30 s, to ensure a good gas supply. Avoid short circuiting the fuel cell (max 10 s)!



## Procedure (3/5)

**PHYWE**  
excellence in science

### 3. Efficiency of the PEM electrolyser

The electrolyser generates hydrogen and oxygen in a ratio of 2:1. The volume  $V_{H_2}$  of the hydrogen generated is measured as a function of the time  $t$ . Start the time measurement when the water in the cylindrical funnel ( $H_2$ ) passes the lower mark. Measure the voltage  $U$  and the current  $I$  during electrolysis.

Measure the room temperature  $R$  and the ambient pressure  $p_{amb}$ .

To conclude the experiment, switch off the electrolyser and close the tubes to the gasometers with the clamps.

A repetition of this experiment with another current (e.g. 2 A) is facilitated, when, e.g., the gasometers must again be refilled for experiments with the fuel cell.

## Procedure (4/5)

**PHYWE**  
excellence in science

### 4. Efficiency of the PEM fuel cell

If the gas production exceeds the maximum volume capacity of the gasometer (approximately 250 ml), the excess gas escapes through the funnel into the atmosphere.

As a consequence, not only the  $H_2$  but also the  $O_2$  gasometer can readily be completely filled using the electrolyser.

After filling the gasometer, switch off the electrolyser and tightly clamp the tubing behind the electrolyser.

- Both gasometers should contain approximately 250 ml of gas.
- Perform the experimental set-up and the circuit in 2)

## Procedure (5/5)

**PHYWE**  
excellence in science

- Tightly seal the lower outlet connections with short pieces of rubber tubing ( $d_i = 4 \text{ mm}$ ) and hose clamps.
- Connect each of the two upper inlet connections of the fuel cell to a gasometer.
- Loosen the clamps on the connecting hoses between the gasometer and the fuel cell.
- Connect a load resistor of  $1 \Omega$  to the fuel cell in accordance with the circuit in 2)

## Evaluation (1/10)

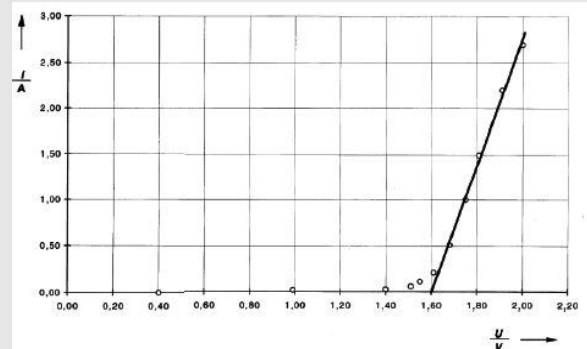
**PHYWE**  
excellence in science

### 1) Current-voltage characteristic of the PEM electrolyser

The measured values are plotted in the shown figure.

From the linear segment of the characteristic line, the decomposition voltage  $U_z$  is determined as the intersection of the extended straight line with the  $U$  axis:

$$U_z = 1.60V$$



Current-voltage characteristic line of a PEM electrolyser

## Evaluation (2/10)

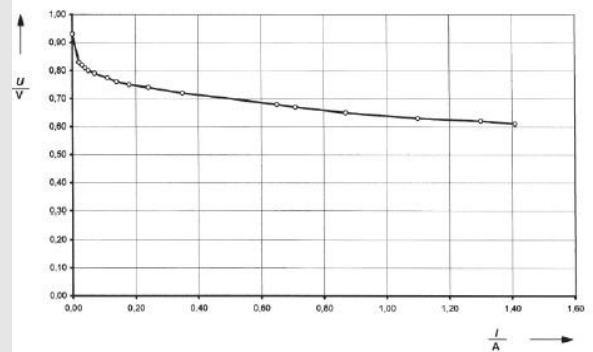
**PHYWE**  
excellence in science

### 2) Characteristic line of the PEM fuel cell

The efficiency of the fuel cell is a function of the gas pressures, the gas throughput, the moistness of the membrane and the temperature.

The no load voltage is  $U_0 = 0.93 \text{ V}$ .

For greater values of current, the characteristic line exhibits a nearly linear course. If the characteristic line deviates from a linear course in this region, it is possible that the supplies of hydrogen and oxygen to the fuel cell are inadequate.



Current-voltage characteristic line of a PEM fuel cell

## Evaluation (3/10)

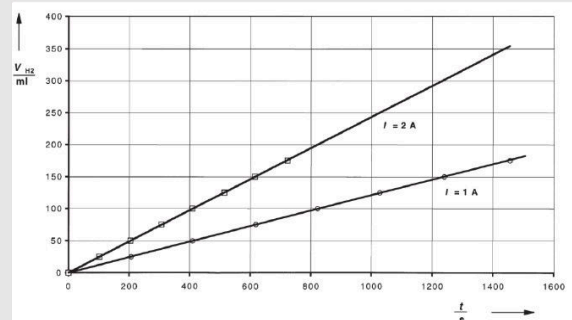
**PHYWE**  
excellence in science

### 3) Efficiency of the PEM electrolyser

From the slope of the straight lines ( $I = 1 \text{ A}$  and  $I = 2 \text{ A}$ ), the generated volumes pro unit time  $V_{H_2}/t$  (measured) can be read off. They are compared with the theoretical values according to equation (3) and from this the gas yield, i.e. the so-called current efficiency, is calculated.

Other conditions:

$$U = 1.71 \text{ V}; p_{amb} = 984 \text{ hPa}; T_R = 21^\circ \text{ C}$$



Volume of the hydrogen generated by the PEM electrolyser as a function of time at different current  $I$

## Evaluation (4/10)

**PHYWE**  
excellence in science

The pressure generated by the column of water in the gasometer must be added to the measured ambient pressure  $p_{amb}$ . This has an average value of approximately 20 hPa. On the other hand the produced hydrogen is saturated with steam, whose partial pressure is 23 hPa. As these two effects compensate each other, no correction of the pressure has to be performed.

Other conditions:

$$p_{amb} = 984 \text{ hPa} ; T_R = 294 \text{ K}$$

Experimental conditions	$V_{H_2} / t$ measured	$V_{H_2} / t$ theoretical	Gas yield
$I = 1.02 \text{ A}$ $U = 1.71 \text{ V}$	0.121 ml/s	0.131 ml/s	92%
$I = 2.02 \text{ A}$ $U = 1.71 \text{ V}$	0.243 ml/s	0.243 ml/s	94%

## Evaluation (5/10)

**PHYWE**  
excellence in science

The efficiency of the electrolyser is somewhat larger at 1.71 V / 1.02 A than for 1.83 V / 2.01 A. The gas yield is the same in both cases.

Other conditions:

$$p_{amb} = 984 \text{ hPa} ; T_R = 294 \text{ K}$$

Experimental conditions	Efficiency
$I = 1.02 \text{ A}$ $U = 1.71 \text{ V}$	82%
$I = 2.02 \text{ A}$ $U = 1.71 \text{ V}$	78%

## Evaluation (6/10)

**PHYWE**  
excellence in science

### 4. Efficiency of the PEM fuel cell

Sample results with load resistance  $1\Omega$

$$p = p_{amb} = 984 \text{ hPa} ; T = 22^\circ\text{C}$$

Mean values:

$$t = 287 \text{ s}$$

$$U = 0.66 \text{ V};$$

$$I = 0.65 \text{ V}$$

Mark	$V_{H_2}/ml$	$t/min : s$	$U/V$	$I/A$
225		0:00	0.68	0.67
200	25	4:42	0.66	0.65
175		0:00	0.67	0.66
150	25	4:47	0.66	0.64
125		0:00	0.67	0.65
100	25	4:57	0.65	0.64

## Evaluation (7/10)

**PHYWE**  
excellence in science

Sample results with load resistance  $1\Omega$

$$p = p_{amb} = 984 \text{ hPa} ; T = 23^\circ\text{C}$$

Mean values:

$$t = 540 \text{ s};$$

$$U = 0.75 \text{ V};$$

$$I = 0.35 \text{ V}$$

Mark	$V_{H_2}/ml$	$t/min : s$	$U/V$	$I/A$
225		0:00	0.75	0.35
200	25	9:05	0.75	0.35
175		0:00	0.75	0.35
150	25	9:07	0.73	0.34
125		0:00	0.75	0.35
100	25	8:57	0.75	0.35

## Evaluation (8/10)

The theoretically required gas volume, determined according to equation (3), is compared with the measured one, and from this the gas utilisation is calculated.

Experimental conditions	$V_{H_2} / t$ measured	$V_{H_2} / t$ theoretical	Gas yield
$I = 1.02 A$ $U = 1.71 V$ $p_{amb} = 998 hPa$ $T_R = 295 K$	0.0871 ml/s	0.0832 ml/s	96%
$I = 2.02 A$ $U = 1.71 V$ $p_{amb} = 998 hPa$ $T_R = 296 K$	0.0463 ml/s	0.0447 ml/s	97%

## Evaluation (9/10)

The efficiency of the electrolyser is somewhat larger at 0.75V / 0.35A than at 0.66V / 0.65A. The gas yield is the same in both cases.

Experimental conditions	Efficiency (using $H_{up}$ )	Efficiency (using $H_{low}$ )
$I = 1.02 A$ $U = 1.71 V$ $p_{amb} = 998 hPa$ $T_R = 295 K$	82%	49%
$I = 2.01 A$ $U = 1.83 V$ $p_{amb} = 998 hPa$ $T_R = 296 K$	78%	57%

## Evaluation (10/10)

**PHYWE**  
excellence in science

In PEM water electrolyser, generation of hydrogen occurs at

- the cathode
- both the cathode and anode
- the anode

✓ Check

The residual product discharged by the hydrogen-oxygen cell is

- Alcohol
- Water
- Hydrogen peroxide

✓ Check

Slide

Score/Total

Slide 42: Multiple tasks

0/2

Total Score



👁 Show solutions

🔄 Retry